


Sunny Missing Addends!

Name: _____

Directions: Solve to find the missing addend.



$$8 + \text{☀} = 10$$

$$10 + \text{☀} = 10$$

$$\text{☀} + 4 = 9$$

$$\text{☀} + 7 = 9$$

$$7 + \text{☀} = 8$$

$$1 + \text{☀} = 6$$

$$\text{☀} + 5 = 10$$

$$\text{☀} + 0 = 5$$

$$3 + \text{☀} = 7$$

$$9 + \text{☀} = 10$$

$$\text{☀} + 6 = 9$$

$$\text{☀} + 2 = 8$$

$$2 + \text{☀} = 6$$

$$4 + \text{☀} = 7$$

$$\text{☀} + 1 = 4$$

$$\text{☀} + 3 = 9$$



Summer Funny: What does the sun drink out of?

Digging for Double Digit Addition!

Name: _____

Directions: Solve. Remember to add the ones first!
Then, use the color code to color the pails.

$$\begin{array}{r} 23 \\ + 46 \\ \hline \end{array}$$

$$\begin{array}{r} 13 \\ + 15 \\ \hline \end{array}$$

$$\begin{array}{r} 51 \\ + 20 \\ \hline \end{array}$$

$$\begin{array}{r} 24 \\ + 23 \\ \hline \end{array}$$

$$\begin{array}{r} 32 \\ + 12 \\ \hline \end{array}$$

$$\begin{array}{r} 79 \\ + 10 \\ \hline \end{array}$$

$$\begin{array}{r} 16 \\ + 22 \\ \hline \end{array}$$

$$\begin{array}{r} 93 \\ + 11 \\ \hline \end{array}$$

$$\begin{array}{r} 16 \\ + 82 \\ \hline \end{array}$$

$$\begin{array}{r} 30 \\ + 18 \\ \hline \end{array}$$

$$\begin{array}{r} 44 \\ + 44 \\ \hline \end{array}$$

$$\begin{array}{r} 21 \\ + 27 \\ \hline \end{array}$$

Color Code: Less than 50- Yellow
More than 50- Blue

Name: _____

2-Digit Subtraction

Subtract the numbers to find the difference. First subtract the numbers at ones place and then subtract the numbers at tens place.



$$\begin{array}{r} 75 \\ -24 \\ \hline \end{array}$$



$$\begin{array}{r} 88 \\ -32 \\ \hline \end{array}$$



$$\begin{array}{r} 67 \\ -34 \\ \hline \end{array}$$



$$\begin{array}{r} 58 \\ -22 \\ \hline \end{array}$$



$$\begin{array}{r} 79 \\ -22 \\ \hline \end{array}$$



$$\begin{array}{r} 67 \\ -40 \\ \hline \end{array}$$



$$\begin{array}{r} 98 \\ -52 \\ \hline \end{array}$$



$$\begin{array}{r} 86 \\ -13 \\ \hline \end{array}$$



$$\begin{array}{r} 99 \\ -53 \\ \hline \end{array}$$



$$\begin{array}{r} 80 \\ -20 \\ \hline \end{array}$$



$$\begin{array}{r} 63 \\ -42 \\ \hline \end{array}$$




$$\begin{array}{r} 78 \\ -50 \\ \hline \end{array}$$



$$\begin{array}{r} 86 \\ -43 \\ \hline \end{array}$$



$$\begin{array}{r} 97 \\ -54 \\ \hline \end{array}$$



Name: _____

Surfing With Subtraction

1. $7 - 4 =$ _____

9. $5 - 3 =$ _____

2. $8 - 3 =$ _____

10. $7 - 6 =$ _____

3. $3 - 1 =$ _____

11. $9 - 4 =$ _____

4. $9 - 7 =$ _____

12. $4 - 1 =$ _____

5. $4 - 2 =$ _____

13. $8 - 5 =$ _____

6. $8 - 6 =$ _____



14. $9 - 7 =$ _____

7. $7 - 3 =$ _____


15. $6 - 3 =$ _____

8. $6 - 4 =$ _____

16. $3 - 2 =$ _____



Dive Into Subtraction!



Name: _____

Directions: How fast can you subtract?
Use the quickest subtraction strategy you
know to solve the facts below.

$10-5=$

$13-3=$

$11-6=$

$15-4=$

$10-4=$

$10-9=$

$19-0=$

$18-8=$

$16-1=$

$12-6=$

$10-0=$

$16-2=$

$17-17=$

$12-1=$

$13-13=$

$18-3=$

$12-0=$

$19-1=$

$18-4=$

$11-5=$

$15-5=$

$19-19=$

$11-4=$

$12-2=$

Summer Funny:
What's the best day to
go to the beach?

Name: _____

Counting COINS



PENNY













NICKEL




DIME



Count on the coins in each row to find the total amount.





Name: _____ Date: _____

More and Less

Fill in the missing numbers.

	10 Less	
1 less	56	1 More
	10 More	

	10 Less	
1 less	78	1 More
	10 More	

	10 Less	
1 less	60	1 More
	10 More	

	10 Less	
1 less	84	1 More
	10 More	

	10 Less	
1 less	20	1 More
	10 More	

	10 Less	
1 less	92	1 More
	10 More	

	10 Less	
1 less	35	1 More
	10 More	

	10 Less	
1 less	49	1 More
	10 More	

	10 Less	
1 less	11	1 More
	10 More	